



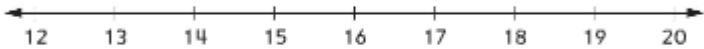

NAME

DATE

TIME



### Unit # 3 Study Guide (Grade 1)

SKILLS	SIMILAR PROBLEMS
<p>① Write number models.</p>	<p>② Sue had 10 rocks. She gave some rocks to her friend. Now she has 7 rocks. How many rocks did Sue give to her friend?</p> <p>Number model:</p> <div style="text-align: center;">  </div> <p>Sue gave _____ rocks to her friend.</p>
<p>② Solve number stories.</p>	<p>① Fill in the number model. Keira has 2 fish and 1 bird. How many pets does Keira have?</p> <p>_____ + _____ = _____ pets</p> <p>③ Zak knows 4 songs. Tanya knows 6 songs. How many songs do they know in all?</p> <p><math>4 + 6 =</math> _____ <math>6 + 4 =</math> _____</p>
<p>③ Skip count on number lines.</p>	<p><b>Try This</b></p> <p>④ Show counting by 2s.</p> <div style="text-align: center;">  </div>
<p>④ Add and subtract on number lines.</p>	<p>③ Start at 20. Count back 5.</p> <div style="text-align: center;">  </div> <p>Where do you land? _____</p>
<p>⑤ Figure out Frames-and-Arrows rules with addition.</p>	<div style="text-align: center;">  </div>